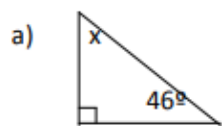
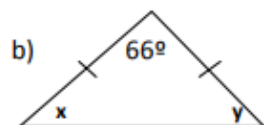


**VIII. Determina el ángulo que se indica e identifica el triángulo que representa**

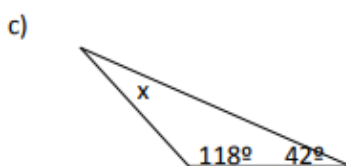


$\sphericalangle x =$

Triángulo.....

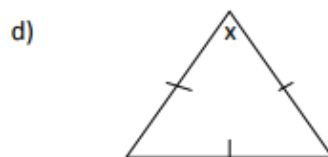


$\sphericalangle x =$



$\sphericalangle x =$

Triángulo.....



$\sphericalangle x =$