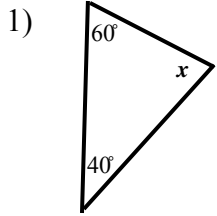


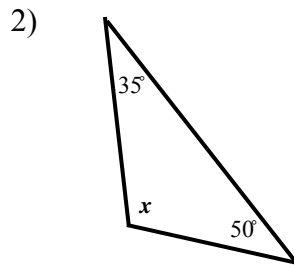
Name _____

SUM OF THE INTERIOR ANGLES OF A TRIANGLE #1

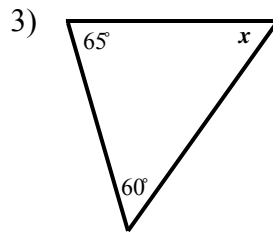
Directions: Find the measurement of each missing angle in the triangles below. Remember, the Triangle Sum Theorem states that the interior angles of a triangle always add up to 180°.



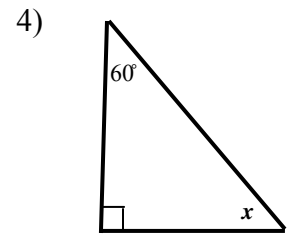
$x =$ _____



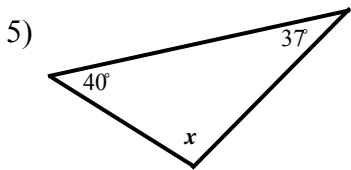
$x =$ _____



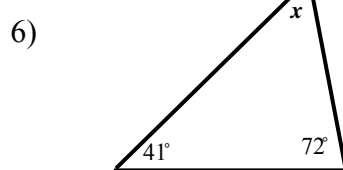
$x =$ _____



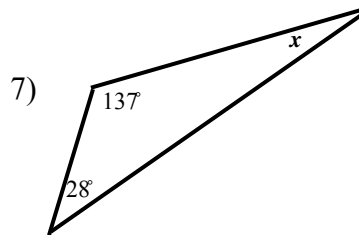
$x =$ _____



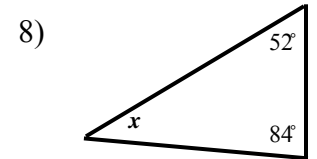
$x =$ _____



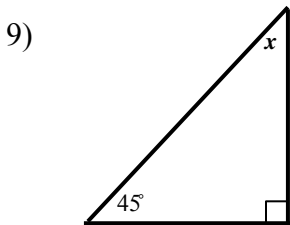
$x =$ _____



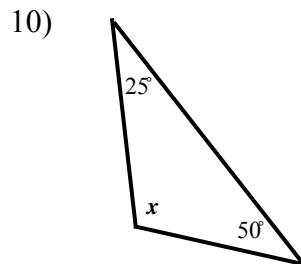
$x =$ _____



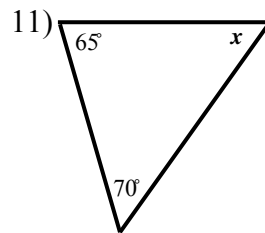
$x =$ _____



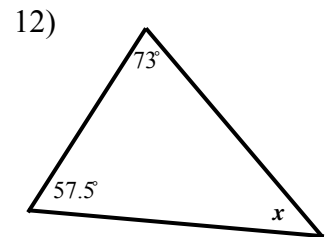
$x =$ _____



$x =$ _____



$x =$ _____



$x =$ _____