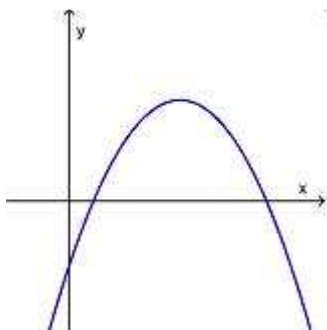


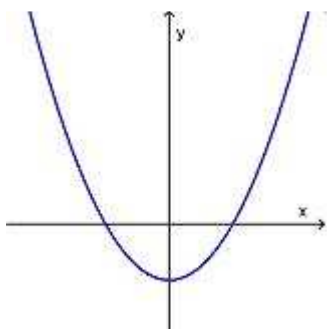
gruppo:

Esercizio

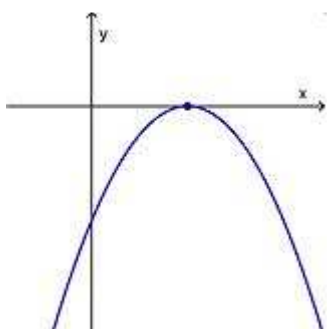
In base al grafico della parabola disegnata, di equazione $y = ax^2 + bx + c$, completa le scritte inserendo il simbolo opportuno ($<$, $>$, $=$)



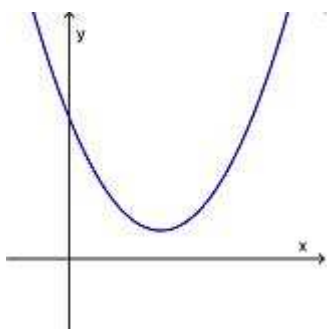
a 0 b..... 0 c 0 Δ 0



a 0 b..... 0 c 0 Δ 0



a 0 b..... 0 c 0 Δ 0



a 0 b..... 0 c 0 Δ 0